

---

# Laboratory 1: Transformers

---



## **WARNING:**

**This laboratory involves high currents and voltages, think before acting !**

## Contents:

---

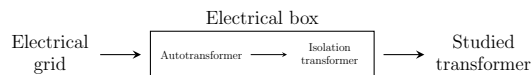
<b>1</b>	<b>Single-phase transformer</b>	<b>1</b>
1.1	Components . . . . .	1
1.2	Start-up . . . . .	1
1.3	Questions . . . . .	2
<b>2</b>	<b>Tri-phase transformer</b>	<b>4</b>
2.1	Components . . . . .	4
2.2	Start-up . . . . .	4
2.3	Questions . . . . .	5

# 1 Single-phase transformer

## 1.1 Components

The following single-phase transformer will be studied.

An autotransformer is used to tune its primary voltage and an isolation transformer is added for increased safety. Both of them are placed together in an electrical box.



A wattmeter will be used to measure the current, voltage and active power at the primary of the studied transformer. To ease the connections, the electrical box has three terminals to connect the wattmeter to ( $V \Rightarrow$  voltage,  $A \Rightarrow$  current,  $C \Rightarrow$  COM).

Three different loads will be connected to the secondary of the studied transformer: a resistive, an inductive and a capacitive load.



To measure the voltage across a load, a voltmeter will be used. Voltmeters are connected in parallel to the load.

To measure the current flowing through a load, an ammeter will be used. Ammeters are connected in series to the load.


**Make sure to NEVER connect an ammeter in parallel to a load. It would result in a condition nearly equivalent to a short-circuit, causing a significant current flow that will harm the ammeter.**

## 1.2 Start-up


1. Ensure that the rotary switch of the autotransformer is set to "0". In this position, its secondary voltage is null.
2. Connect the plug of the electrical box to the electrical grid.
3. Except for the short-circuit measurement, increase the primary voltage of the studied transformer up to 230 V. **For the short circuit measurements, the voltage should not exceed 10 % of the autotransformer maximum output voltage.**




Resistive



Inductive



Capacitive

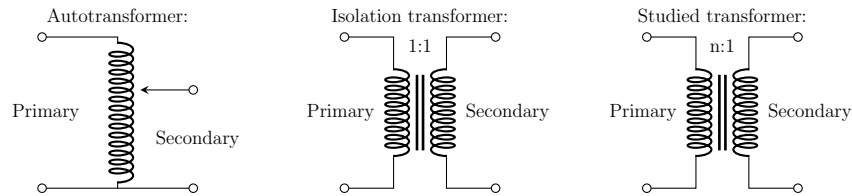




## 1.3 Questions

### 1.3.1 Question 1

Using the hereunder schematics for the auto-, isolation and studied transformers, show how they are connected to each other. Also represent the terminals  $V$ ,  $A$  and  $C$  of the electrical box.



### 1.3.2 Question 2

What is the conversion ratio of the studied transformer, what are its current, voltage and power ratings? **You should not exceed those ratings for the rest of the lab.**

*Hint: See the front and the top of the studied transformer.*

### 1.3.3 Question 3

Draw the simplified equivalent model of a single-phase transformer and explain what each of the impedances  $R_1$ ,  $R_2$ ,  $X_1$ ,  $X_2$ ,  $R_{H+F}$  and  $X_\mu$  stands for.

### 1.3.4 Question 4

Transformer are usually built so that  $R_1, R_2, X_1, X_2 \ll R_{H+F}, X_\mu$ . Use this relation to build a second simplified equivalent model of a single-phase transformer, with the impedances gathered and moved to the secondary winding.

### 1.3.5 Question 5

Considering the simplified equivalent model from Question 4 (impedances gathered and moved to the secondary winding), for which impedances can you determine values through a short-circuit secondary winding measurement?

If the secondary is shorted, what is the maximum current that can run through the primary without exceeding the ratings of the studied transformer?

Perform the short-circuit secondary winding measurement. From the measured voltage, current and active power, deduce the appropriate impedance values.

**Start the test with a null primary voltage and increase it by turning the switch of the autotransformer. Make sure to keep the primary current under the limit previously computed. You should reach it when the switch reaches around 10 %.**

Why cannot you use an ammeter connected to the secondary winding of the studied transformer to check the secondary current remains under its maximum rating?

### 1.3.6 Question 6

Considering the simplified equivalent model from Question 4 (impedances gathered and moved to the secondary winding), for which impedances can you determine values through an open-circuit secondary winding measurement?

Perform the open-circuit secondary winding measurement and deduce the appropriate impedance values.

**Make sure the secondary wires CANNOT touch during the test.**

Do you respect the hypothesis  $R', X' \ll R'_{H+F}, X'_\mu$ ?

### 1.3.7 Question 7

In the theoretical class, one makes the hypothesis  $X' \gg R'$ . Starting from the equivalent model of Question 4 (impedances gathered and moved to the secondary winding) and using this hypothesis, provide an equivalent Thevenin's model of the transformer, seen from the secondary winding.

Using this Thevenin's equivalent model, draw a phasor diagram that represents the condition of a purely resistive load connected to the secondary coil of the transformer. From it, deduce and draw the theoretical relationship between secondary voltage and secondary current.

Do the same for a purely inductive and a purely capacitive load.

### 1.3.8 Question 8

Measure the secondary voltage and current for:

- a resistive load of 48, 24, 12, 6 and 3  $\Omega$ ,
- an inductive load of 140, 70, 35, 17.5 and 8.75 mH,
- a capacitive load of 65, 130, 260, 520 and 1040  $\mu\text{F}$ .

*Hint: For each of the three loads, vary the load impedance and maintain the primary voltage of the studied transformer to 230 V by properly turning the rotary switch of the autotransformer. Measure the current flowing through the load using the ammeter (**connected in series to the load**) and the voltage across the load using the voltmeter (connected in parallel to the load).*

**To prevent voltage spikes with the inductive load, set the primary voltage to zero before changing the load impedance.**

Draw the U-I output characteristic for each of the loads. Which current would you reach if the secondary was shorted? Do your measurements match the theoretical curves obtained at Question 7? Why?

### 1.3.9 Question 9

Redo Question 7 by making the opposite hypothesis  $R' \gg X'$ .

Do the measurements performed at Question 8 match your new developments?

## 2 Tri-phase transformer

### 2.1 Components

A three-phase transformer will be studied. This transformer stands behind the lab table.

A three-phase autotransformer, whose primary is connected to the three-phase electrical grid, delivers secondary line voltages of adjustable amplitude: turn the rotary switch on top of it to increase or decrease it. The autotransformer secondary is connected to the primary of the studied transformer.



The secondary of the studied transformer is connected to a resistive load, whose value is selected with a rotary switch:

- position 0  $\rightarrow$  open circuit,
- position 1  $\rightarrow 27\ \Omega$ ,
- position 2  $\rightarrow \frac{27}{2}\ \Omega$ ,
- position 3  $\rightarrow \frac{27}{3}\ \Omega$ ,
- etc.

All the power measurement will be performed using a power quality analyzer (Fluke 434 or equivalent).

### 2.2 Start-up

1. Ensure that the rotary switch of the autotransformer is set to "0". In this position, its secondary voltage is null.
2. Turn on the table by pressing the red buttons next to the table right leg.
3. Connect the autotransformer to the studied transformer by pressing the "ON" button on top of the control panel.
4. Increase the primary voltage of the studied transformer.  
**For the short circuit measurements, the voltage should not exceed 5 % of the autotransformer maximum output voltage.**



## 2.3 Questions


### 2.3.1 Question 1

What are the current, voltage and power ratings of the studied transformer? Why are there two current and voltage ratings but only one power rating? **You should not exceed those ratings for the rest of the lab.** how can you link the nominal apparent power with the nominal currents and voltages?

*Hint: The ratings are written on the nameplate on top of the studied transformer. It is also rewritten on the table panel.*

### 2.3.2 Question 2

The primary and secondary windings of the studied transformer can be connected in either delta ( $\Delta$ ) or star (Y) configurations. When the transformer is off, you can choose the configuration of either the primary or secondary windings by pressing the relevant button on the control panel to the right of the table.



With the primary line voltage set to its nominal value, measure the transformer ratio  $n = \frac{U_1}{U_2}$  for each of the four possible configurations (primary and secondary set as  $\Delta\Delta$ ,  $YY$ ,  $\Delta Y$ , and  $Y\Delta$ ), and link it to the column ratio  $n_c = \frac{V_1}{V_2}$ . Deduce the value of the column ratio  $n_c$ .


### 2.3.3 Question 3

With the primary and secondary wired in a  $\Delta Y$  configuration, what is the maximum current that can run through the primary windings without exceeding the ratings of the studied transformer if the secondary windings are shorted?

### 2.3.4 Question 4

One can short the secondary windings of the studied transformer by manually connecting the secondary phases together. Note that, when the secondary windings are shorted, the board will stop displaying measurements about the secondary side.

**To short or remove the short, ask to a teaching assistant.**



Considering the equivalent model of one phase of the studied transformer with impedances gathered and moved to the secondary winding, perform the short-circuit measurement in the  $\Delta Y$  configuration and deduce the appropriate impedance values assuming the system is balanced.

**Start the test with a null primary voltage and increase it by turning the switch of the autotransformer. Make sure to keep the primary line current under the limit computed in question 3. You should reach it before the switch reaches 5 %.**

### 2.3.5 Question 5

Considering the equivalent model of one phase of the studied transformer with impedances gathered and moved to the secondary winding, perform the open-circuit measurement in the  $\Delta Y$  configuration with the primary line voltage set to its nominal value. Deduce the appropriate impedance values assuming the system is balanced.

**Make sure that the shorts of the secondary windings have been removed.**

Do you respect the hypothesis  $R', X' \ll R'_{H+F}, X'_{\mu}$ ?

### 2.3.6 Question 6

Place the transformer close to its nominal operating point, in the  $\Delta Y$  configuration.

With the single-phase equivalent model developed over the two last questions, compute the transformer efficiency using only the measurement of the primary line voltage, primary line current, primary active power and primary reactive power.

Measure now the transformer efficiency by directly taking the secondary to primary active-power ratio.